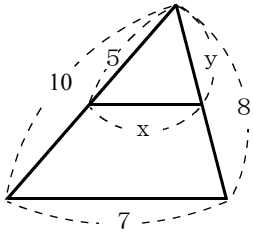


/	解説
/	NO5A,5B,5C

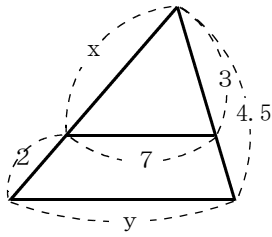
相似な図形NO5
中3 相似な三角形の線分の長さを求める

NAME	mistake

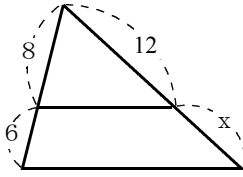
1



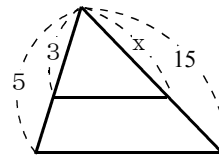
2



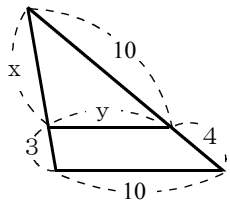
3



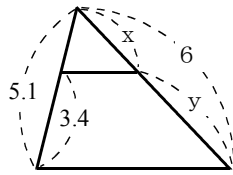
4



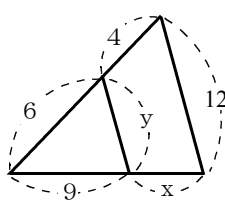
5



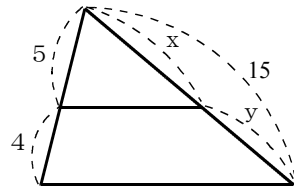
6



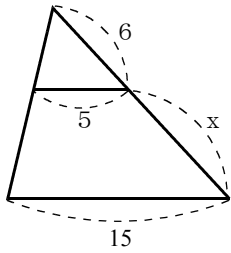
7



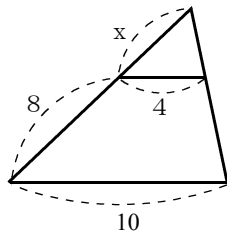
8



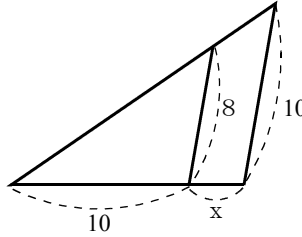
9



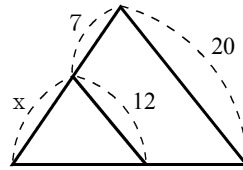
10



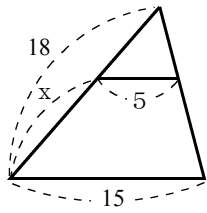
11



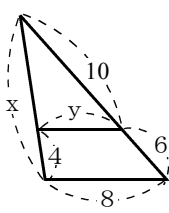
12



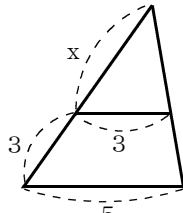
13



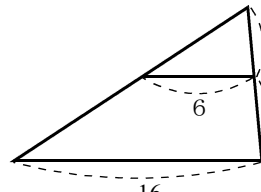
14



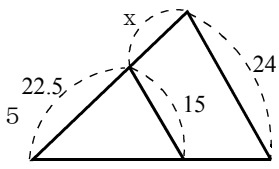
15



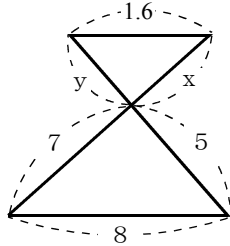
16



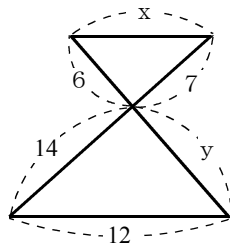
17



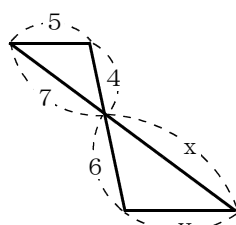
18



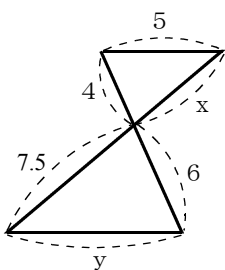
19



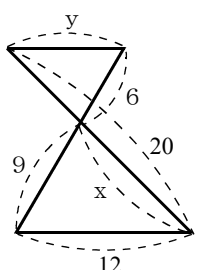
20



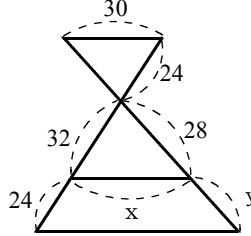
21



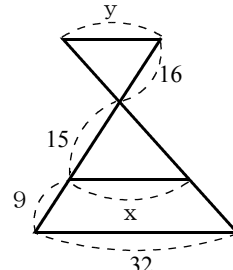
22



23



24



1	x	y
2	x	y
3	x	
4	x	
5	x	y
6	x	y
7	x	y
8	x	y
9	x	
10	x	
11	x	
12	x	
13	x	
14	x	y
15	x	
16	x	
17	x	
18	x	y
19	x	y
20	x	y
21	x	y
22	x	y
23	x	y
24	x	y