

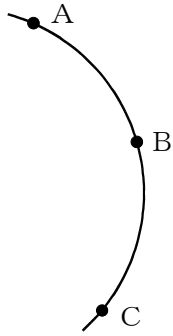
/	解説
/	NO7と自力

中 1	平面図形 NO 7 基本作図⑨&⑩
--------	----------------------

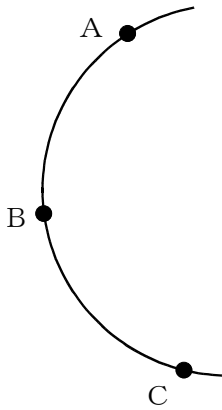
NAME	mistake

問題1 3点A, B, Cを通る円がある。この円の中心Oと円Oを作図せよ。

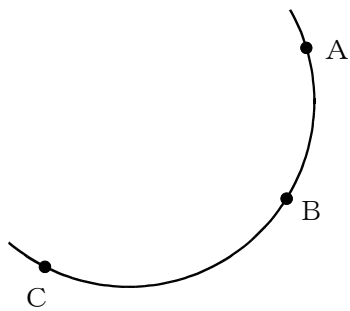
①



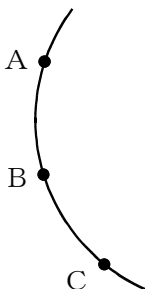
②



③

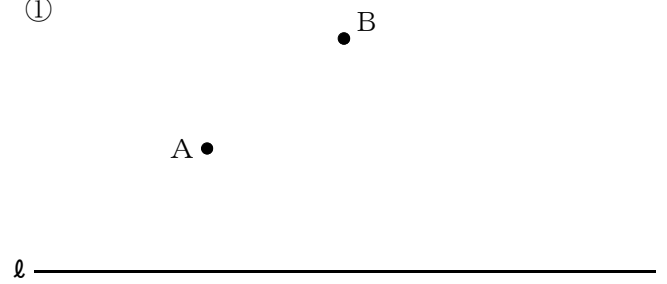


④

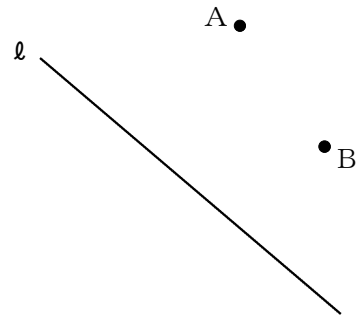


問題2 直線  $l$  上に2点A, Bへの距離が等しい点Pを作図せよ。

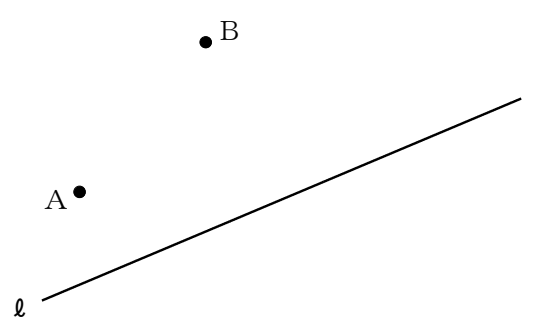
①



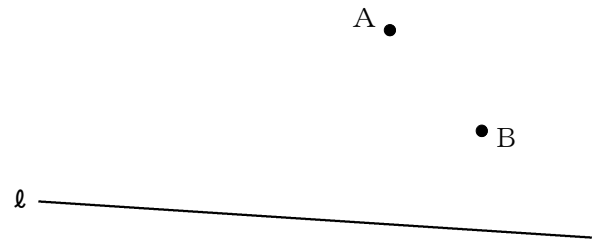
②



③



④



⑤

