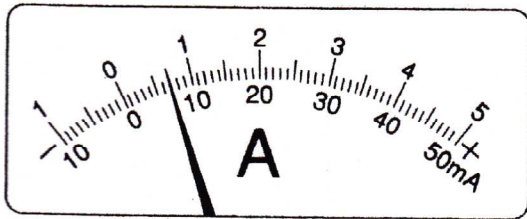
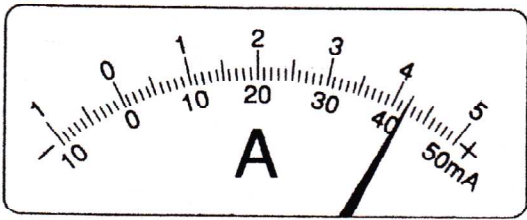


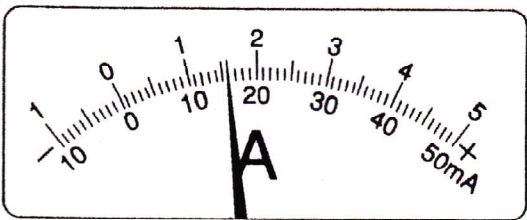
開始日 月 / 日	終了日 月 / 日	電流と電圧 電流計と電圧計の読み方-③	間違えた数	NAME
--------------	--------------	------------------------	-------	------



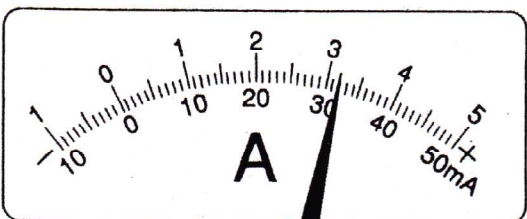
50mA	500mA	5A
7	70	0.7



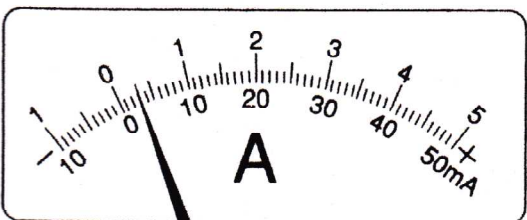
50mA	500mA	5A
42	420	4.2




50mA	500mA	5A
16	160	1.6



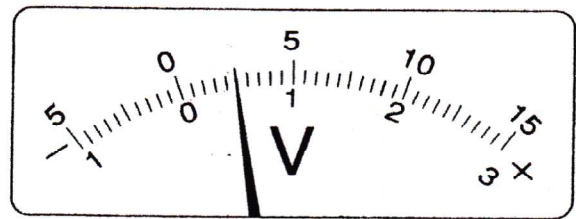
50mA	500mA	5A
32	320	3.2




50mA	500mA	5A
3	30	0.3




300V	15V	3V
210	10.5	2.1



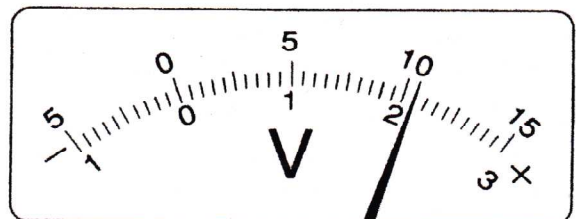
300V	15V	3V
50	2.5	0.5



300V	15V	3V
150	8	1.5



300V	15V	3V
80	4	0.8



300V	15V	3V
210	10.5	2.1

10.5