

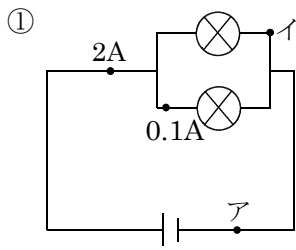
/	解説
/	問題に記載

中2理科電流と電圧

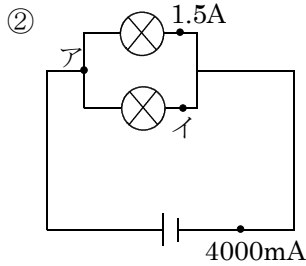
オームの法則基本計算までの復習②

NAME	間違い

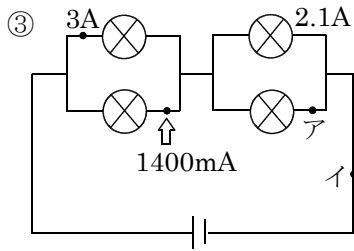
問1 次の電流、電圧を求めよ。



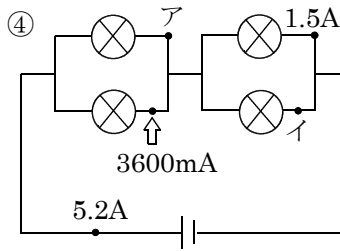
ア	イ
A	mA



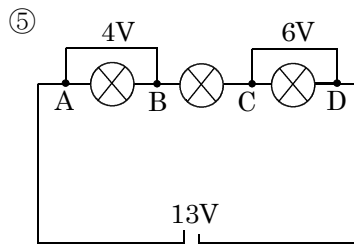
ア	イ
A	mA



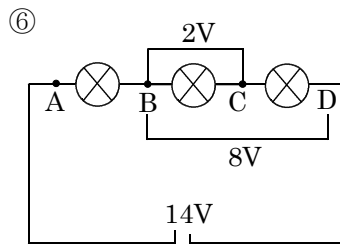
ア	イ
A	mA



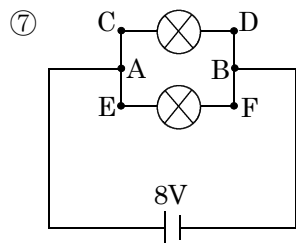
ア	イ
A	mA



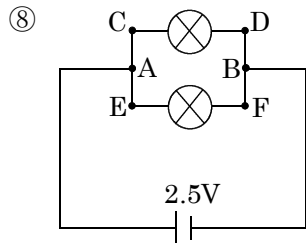
BC	AC	BD	AD
V	V	V	V



CD	AB	AC	AD
V	V	V	V

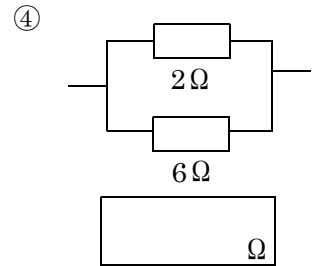
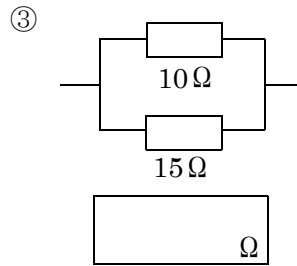
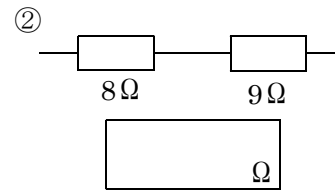
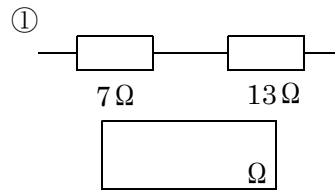


AB	CD	EF
V	V	V

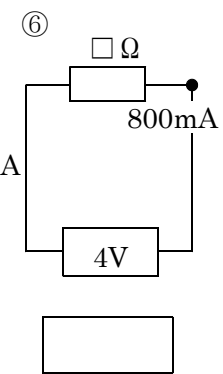
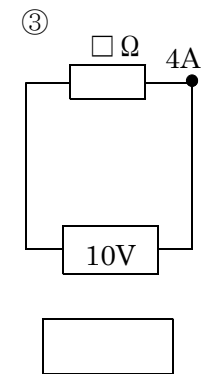
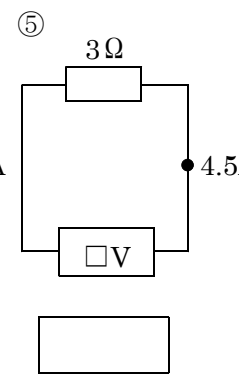
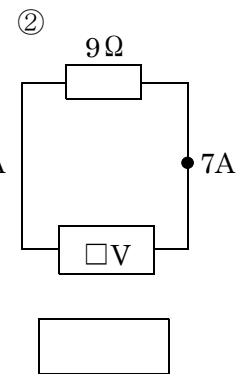
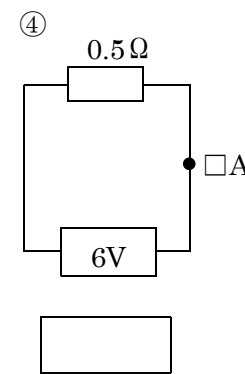
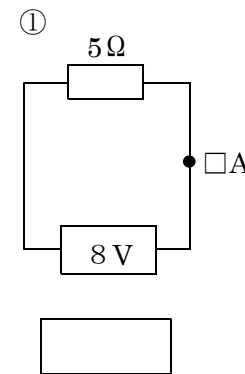


AB	CD	EF
V	V	V

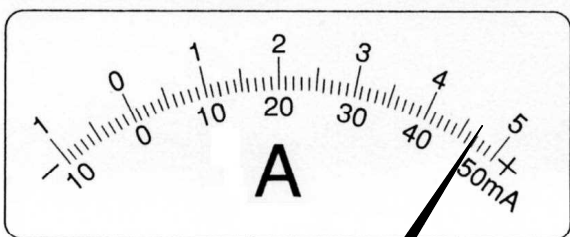
問2 次の合成抵抗を求めよ。



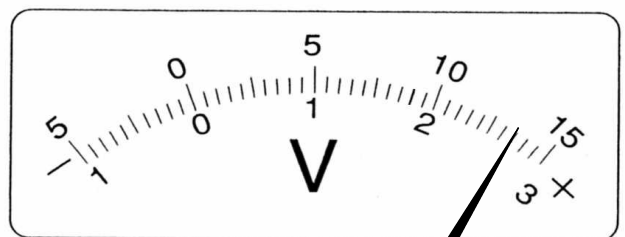
問3 次の電流・電圧・抵抗を求めよ。



問4 次の電流計と電圧計の値を求めよ。



50mA	500mA	5A



300V	15V	3V