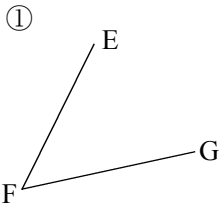


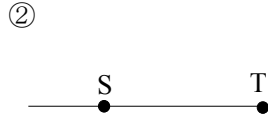
/	解説
/	NO1

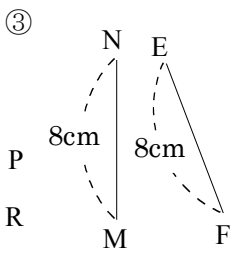
NO1	
中 1	図形用語問題②

NAME	mistake

問題1 次の図を記号で表せ。

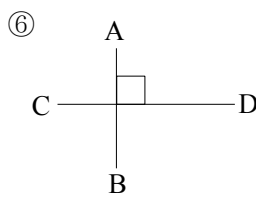


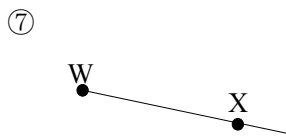


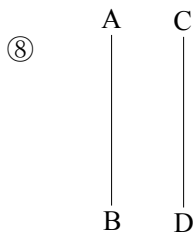


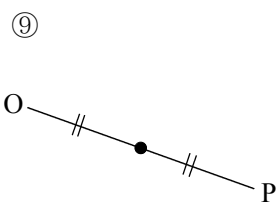


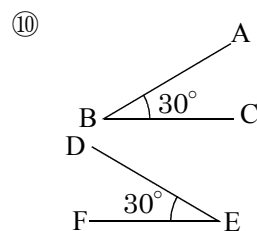












問題2 次の図を記号で表せ。

