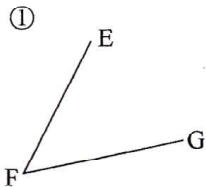


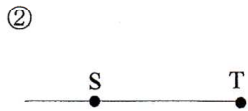
名前	解説	中 1	平面図形 NO4	%	正解	/
	NO1		図形用語問題②		正 開	

図形用語問題②

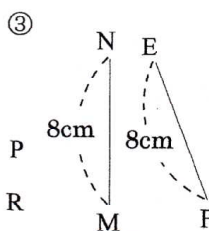
問題1 次の図を記号で表せ。



$\angle EFG$  と  $\angle GFE$




半直線 TS



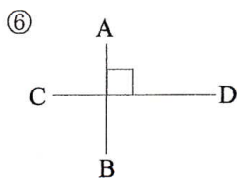
$NM = EF$



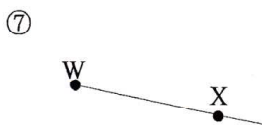
線分 EF



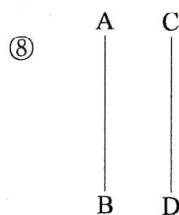
直線 AB



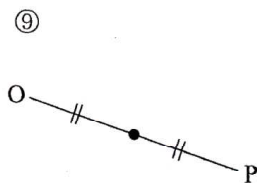
$AB \perp CD$



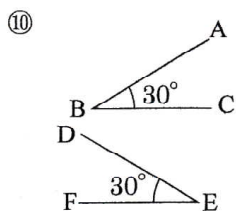
半直線 WX



$AB \parallel CD$

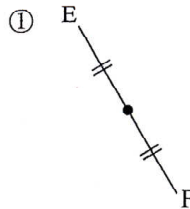


直線 OP の中点

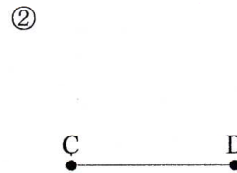


$\angle DEF = \angle ABC$

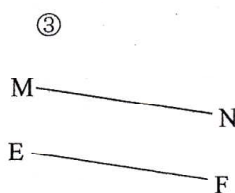
問題2 次の図を記号で表せ。



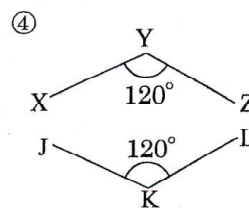
線分 EF の中点



線分 CD



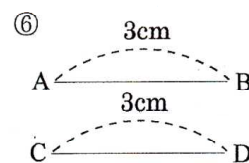
$MN \parallel EF$



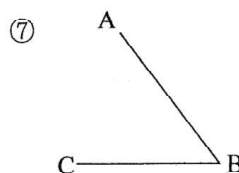
$\angle XYZ = \angle ZKL$



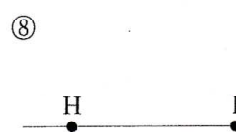
半直線 MN



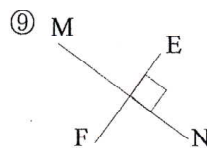
$AB = CD$




$\angle CBA$  と  $\angle ABC$



半直線 IH



$EF \perp MN$



直線 AB